


Name _____




Holiday Graphing Practice


Directions: Create a bar graph using the following data.

What Foods Will You Enjoy This Holiday Season?

Food	# of People
Turkey	20
Fudge	10
Stuffing	16
Eggnog	17
Fruitcake	1
Cookies	14
Pie	7
Rolls	12
Green Beans	6
Apple Cider	8



This Holiday Season, Will You ... ?





Directions: Create a circle graph using the following data.


* Eat and drink whatever you want. 41%

* Try to eat healthy, but enjoy some treats. . . 50%

* Completely stick to the diet. 7%

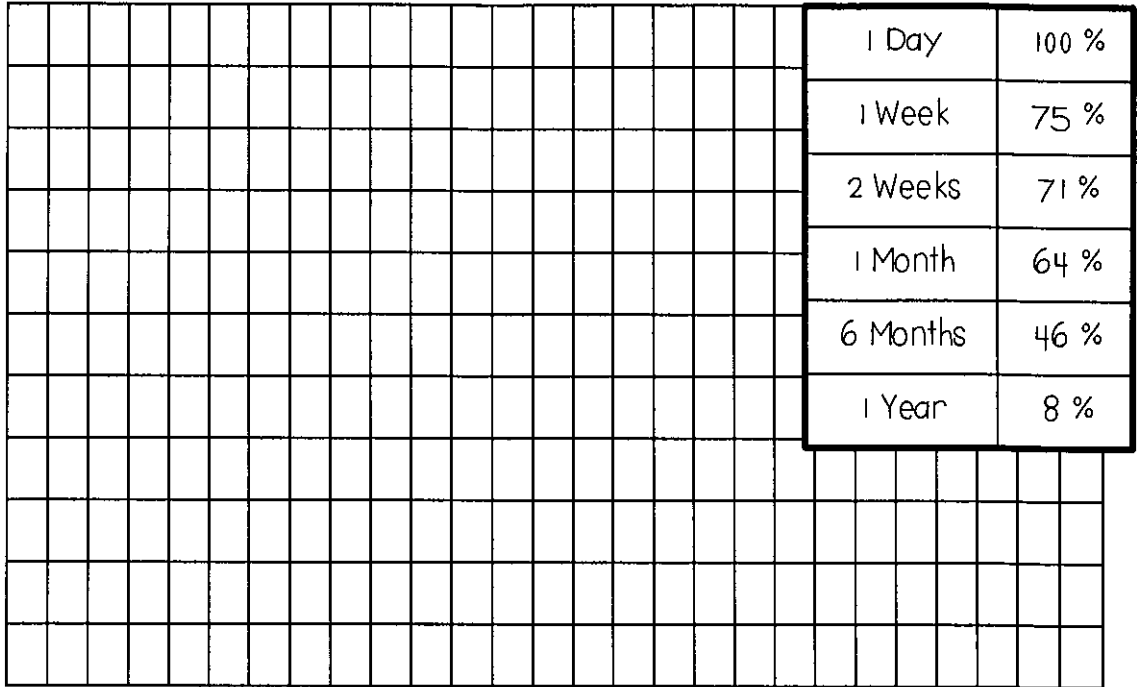
* Not sure. 2%





Directions: Create a line graph using the following data.

How Long I Kept My New Year's Resolution



Directions: Create a scatter plot using the following data.

How Many Presents Will You Buy Over the Holidays?

Amount of People	Number of Presents
1	4
3	6
4	8
12	12
10	16
6	20
1	22
2	24
1	26

