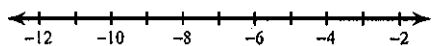


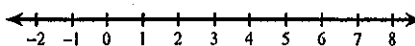
One-Step Inequalities

Solve each inequality and graph its solution.

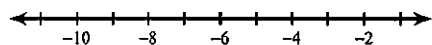
1) $-12 > x - 7$



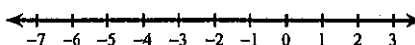
2) $-1 + r \geq 4$



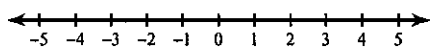
3) $n - 6 \leq -14$



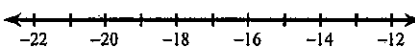
4) $b - 7 < -12$



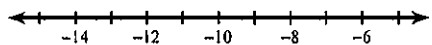
5) $a - 17 > -16$



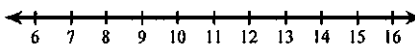
6) $15 + x \leq 0$



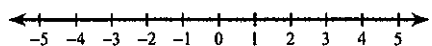
7) $3 + v \leq -9$



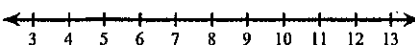
8) $8 \geq n - 6$



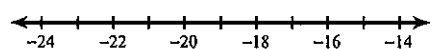
9) $-3x > 3$



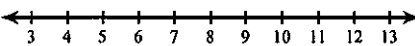
10) $\frac{n}{3} > 3$



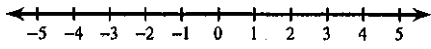
11) $\frac{k}{4} < -4$



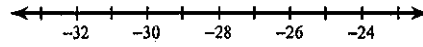
12) $-9x \geq -90$



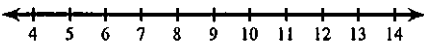
13) $0 \geq 7n$



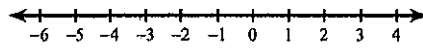
14) $\frac{m}{5} \geq -5$



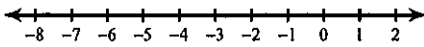
15) $-13x < -156$



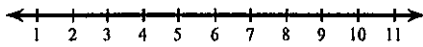
16) $32 \geq -16p$



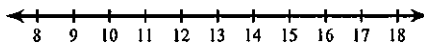
17) $-8 > v - 3$



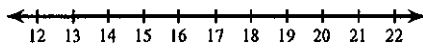
18) $11 \leq 5 + x$



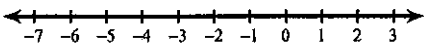
19) $25 \geq n + 13$



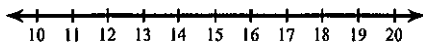
20) $-168 > -12a$




21) $-3 \leq x - 4$



22) $\frac{r}{3} > 6$



23) $12n \geq 84$



24) $-22 > -10 + b$

